

Name: \_\_\_\_\_


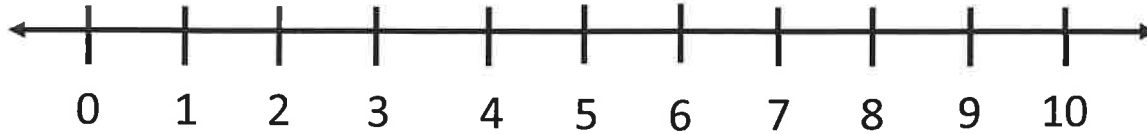
# Subtraction

Help the bakers find their cakes. Subtract the numbers to find the difference. Color the cake with the correct answer.



Name \_\_\_\_\_ Date \_\_\_\_\_


# Subtraction



Kevin had a birthday party. He had ten balloons. He gave away seven. How many balloons does he have left?

Ten Frame				

Equation	Difference
$\underline{\quad} - \underline{\quad} = \underline{\quad}$	



# Lunch Boxes

Name \_\_\_\_\_



## The Beginning:



There are 4 lunch boxes in my class.



## The Middle: X

I take 1 lunch box and go to the cafeteria.



## The End:

There are \_\_\_\_\_ lunch boxes left in my class.

My math equation:

$$\square - \square = \square$$

©Nancy Wilcox Richards

